

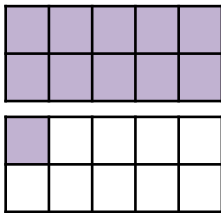


Name: \_\_\_\_\_

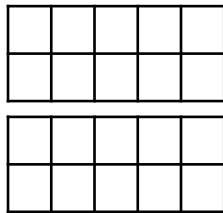
# Teen Numbers with Professor Galaxy

For each teen number, show the value on the ten frames. Professor Galaxy did the first one for you!

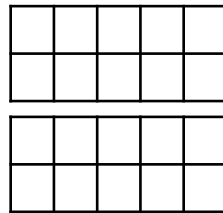
11



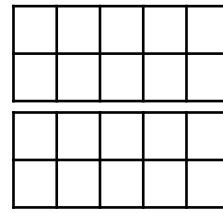
12



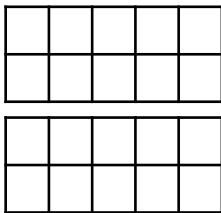
13



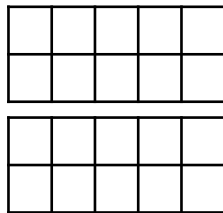
14



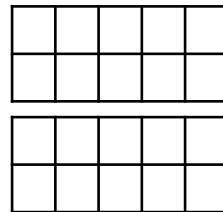
15



16

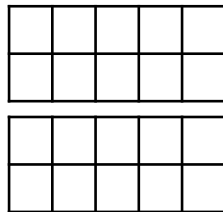


17


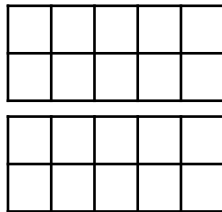


Remember, a teen number is a ten and some ones!

18



19



For more worksheets like this, visit our website:

[www.adventuresofscubajack.com](http://www.adventuresofscubajack.com)