




Name: _____

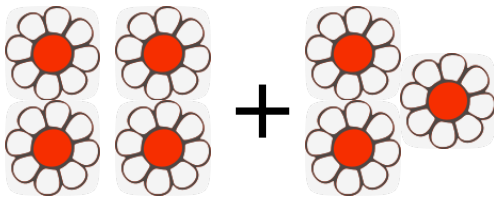
Adding within 10

Write a number sentence for each picture. Then write the sum.


1) $\underline{3} + \underline{2} = \underline{5}$




2) $\underline{\quad} + \underline{\quad} = \underline{\quad}$




3) $\underline{\quad} + \underline{\quad} = \underline{\quad}$




4) $\underline{\quad} + \underline{\quad} = \underline{\quad}$



5) $\underline{\quad} + \underline{\quad} = \underline{\quad}$



6) $\underline{\quad} + \underline{\quad} = \underline{\quad}$



For more worksheets like this, visit our website:

www.adventuresofscubajack.com