


Multiplication Printables



Freebie from
Love to Teach

<http://lovetoteach123.blogspot.com>

Graphics from the Pond
<http://fromthepond.blogspot.com>



Multiplying by 10 and 100



$$\begin{array}{r} 100 \\ \times 8 \\ \hline \end{array}$$

$$\begin{array}{r} 10 \\ \times 5 \\ \hline \end{array}$$

$$\begin{array}{r} 100 \\ \times 3 \\ \hline \end{array}$$

$$\begin{array}{r} 400 \\ \times 2 \\ \hline \end{array}$$

$$\begin{array}{r} 12 \\ \times 10 \\ \hline \end{array}$$

$$\begin{array}{r} 30 \\ \times 4 \\ \hline \end{array}$$

$$\begin{array}{r} 200 \\ \times 6 \\ \hline \end{array}$$

$$\begin{array}{r} 400 \\ \times 8 \\ \hline \end{array}$$

$$\begin{array}{r} 80 \\ \times 3 \\ \hline \end{array}$$


$$\begin{array}{r} 6 \\ \times 10 \\ \hline \end{array}$$

$$\begin{array}{r} 60 \\ \times 9 \\ \hline \end{array}$$

$$\begin{array}{r} 80 \\ \times 7 \\ \hline \end{array}$$

There are 40 pieces of candy in each drawer. How many pieces of candy are in 4 drawers?

There are 500 books on each large shelf. How many books on 9 large shelves?



Multiplication Facts

1. $6 \times 5 =$

2. $4 \times 2 =$


3. $9 \times 3 =$

4. $8 \times 8 =$

5. $3 \times 5 =$

6. $7 \times 6 =$

7. $8 \times 6 =$



Multiplication Matching

Draw a line to match each multiplication fact with its product.

5×9

36

3×12

42

8×6

110

6×7

45

11×10

48

9×9

81

Multiplication Commutative Property



$$\underline{\quad} \times \underline{\quad} = \underline{\quad}$$

$$\underline{\quad} \times \underline{\quad} = \underline{\quad}$$



$$\underline{\quad} \times \underline{\quad} = \underline{\quad}$$

$$\underline{\quad} \times \underline{\quad} = \underline{\quad}$$



$$\underline{\quad} \times \underline{\quad} = \underline{\quad}$$

$$\underline{\quad} \times \underline{\quad} = \underline{\quad}$$



$$\underline{\quad} \times \underline{\quad} = \underline{\quad}$$

$$\underline{\quad} \times \underline{\quad} = \underline{\quad}$$



$$\underline{\quad} \times \underline{\quad} = \underline{\quad}$$

$$\underline{\quad} \times \underline{\quad} = \underline{\quad}$$



$$\underline{\quad} \times \underline{\quad} = \underline{\quad}$$

$$\underline{\quad} \times \underline{\quad} = \underline{\quad}$$